

READY, SET, GO!

Name

Period

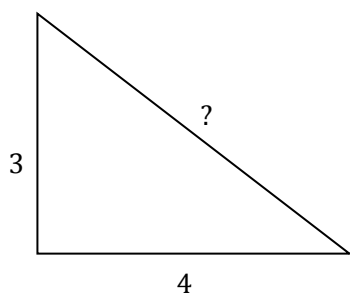
Date

**READY**

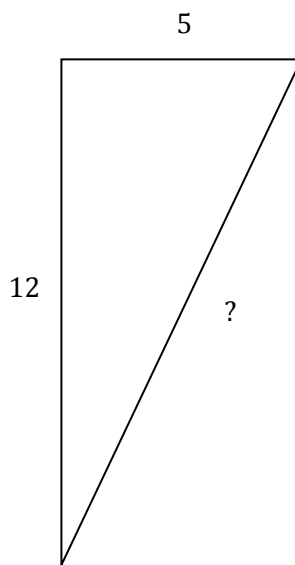
Topic: Pythagorean Theorem

**For each of the following right triangles determine the number units measure for the missing side.**

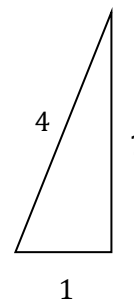
1.



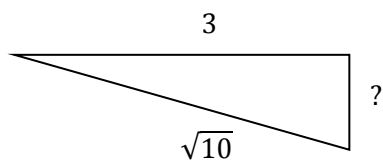
2.



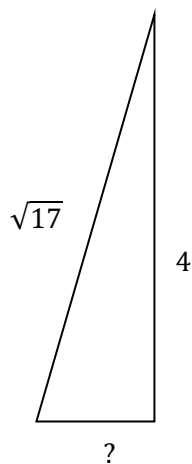
3.



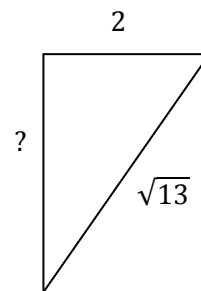
4.



5.



6.



**SET**

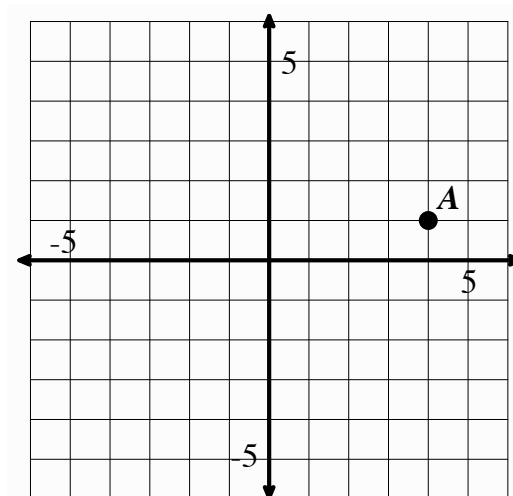
Topic: Transformations.

**Transform points as indicated in each exercise below.**

7a. Rotate point A around the origin  $90^\circ$  clockwise, label as A'

b. Reflect point A over x-axis, label as A''

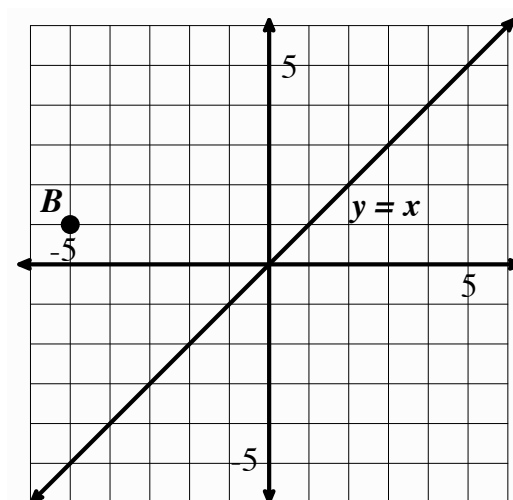
c. Apply the rule  $(x - 2, y - 5)$ , to point A and label A'''



8a. Reflect point B over the line  $y = x$ , label as B'

b. Rotate point B  $180^\circ$  about the origin, label as B''

c. Translate point B the point up 3 and right 7 units,  
label as B'''

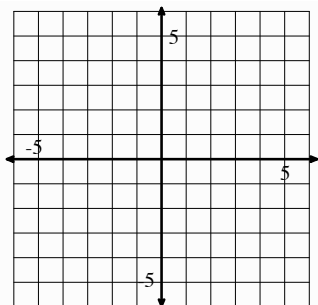


**GO**

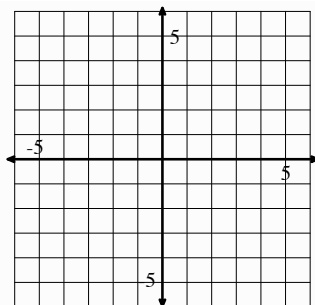
Topic: Graphing linear equations.

Graph each function on the coordinate grid provided. Extend the line as far as the grid will allow.

9.  $f(x) = 2x - 3$

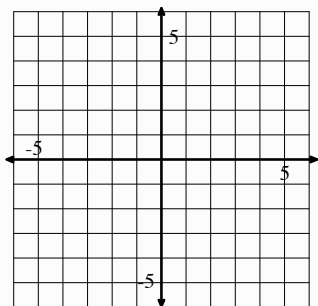


10.  $g(x) = -2x - 3$

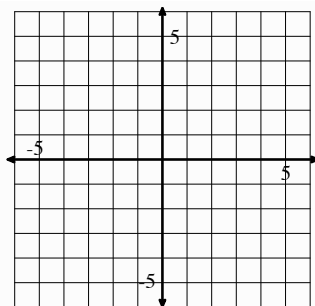


11. What similarities and differences are there between the functions  $f(x)$  and  $g(x)$ ?

12.  $h(x) = \frac{2}{3}x + 1$

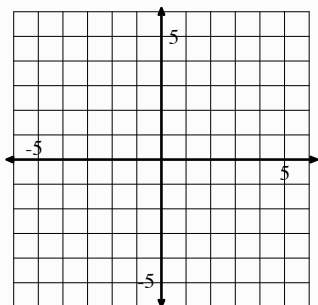


13.  $k(x) = -\frac{3}{2}x + 1$

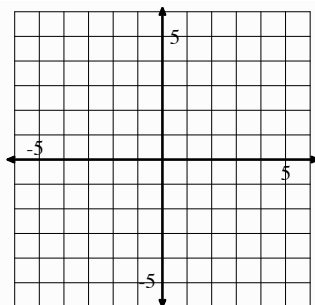


14. What similarities and differences are there between the equations  $h(x)$  and  $k(x)$ ?

15.  $a(x) = x + 1$



16.  $b(x) = x - 3$



17. What similarities and differences are there between the equations  $a(x)$  and  $b(x)$ ?